

WALT: count in 2s.

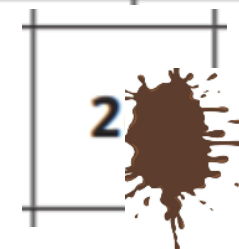
Monday 22nd February 2021.

Watch the video <https://vimeo.com/507065512> and then have a go at colouring the numbers by skip counting by 2. Colour the '2' box, then colour every 2nd box. What do you notice?

1	2	3	4	5	6	7	8	9	10
11	12	13	14	15	16	17	18	19	20
21	22	23	24	25	26	27	28	29	30
31	32	33	34	35	36	37	38	39	40
41	42	43	44	45	46	47	48	49	50

Ready for your challenge? Mrs Hetherington has spill her coffee on this two digit number... she says it was a number that was coloured in on her 50 chart.

What number could it be? How many different numbers could it be?

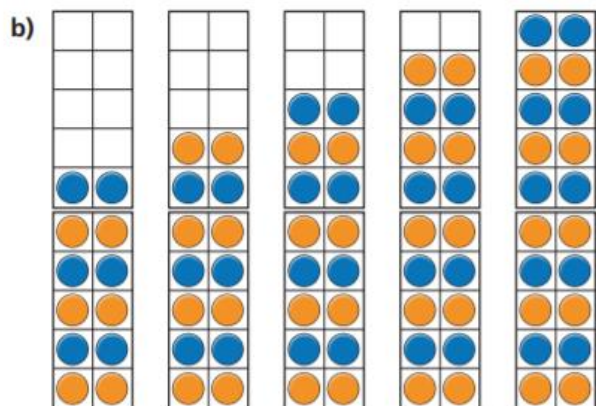
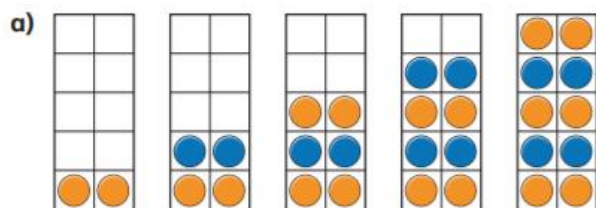


Watch the video <https://vimeo.com/505658511> and then have a go at these questions:

Count in 2s



1 What are the numbers?



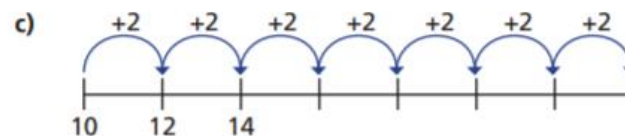
2 How many flowers are there?



3 Circle 14 socks.



4 Fill in the missing numbers.



5 How far can you count up in 2s?

Work with a partner.

Can you count up to 50 together?

Now try counting down in 2s from 50



WALT: count in 5s.


Wednesday 24th February 2021.

Watch the video <https://vimeo.com/507067325> and then have a go at colouring the numbers by skip counting by 5. Colour the '5' box, then colour every 5th box. What do you notice?

1	2	3	4	5	6	7	8	9	10
11	12	13	14	15	16	17	18	19	20
21	22	23	24	25	26	27	28	29	30
31	32	33	34	35	36	37	38	39	40
41	42	43	44	45	46	47	48	49	50

Ready for your challenge? Mrs Hetherington has spill her coffee on this two digit number... again! She is so clumsy!

She says it was a number that was coloured in on her 50 chart. What number could it be? How many different numbers could it be?



Watch the video <https://vimeo.com/507075995> and then have a go at answering these questions:

Count in 5s

1 What are the numbers?

3 Colour 35 petals.

2 How many spots are there in total?

There are spots in total.

4 Fill in the missing numbers.

a)

0	5	10					
---	---	----	--	--	--	--	--

b)

50	45	40					
----	----	----	--	--	--	--	--

c)

5 Mo counts up to 50 in 5s.
Eva counts up to 50 in 2s.
What numbers do they both say?
Can you spot a pattern?

WALT: to know our 2 and 10 times tables.

Friday 26th February 2021.

There is no White Rose Maths video today. Today is your chance to look back at any lessons this week that you struggled with and have another go, or you may have feedback from your teacher that has asked you to have another go at a particular question.

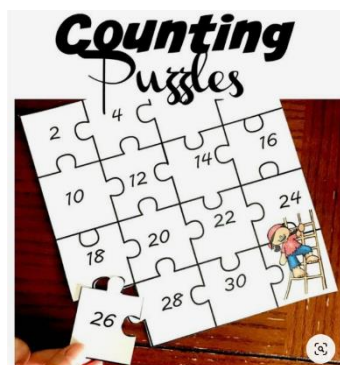
Once you have done this or you have no maths lessons or tasks to go back over, we would like you to practise your 2 and 10 times tables. By the end of Year 1 you should know these REALLY well and by the end of Year 2, you will need to know your 5 times tables facts too.

Have a look at these tasks:

2 times table

Watch: <https://www.youtube.com/watch?v=iiR8hqJeqsw>

Craft: a 2 times table puzzle



Play: <https://www.topmarks.co.uk/times-tables/coconut-multiples> then click 'x2'.

10 times table

Watch: <https://www.youtube.com/watch?v=W8CE0IAOGas>

Craft: a times table tangle!



Play: <https://www.topmarks.co.uk/maths-games/mental-maths-brain> then click 'x' and then 'x 10'.