

WALT: identify one more and one less than a given number.

Monday 8<sup>th</sup> February 2021.

Watch the video <https://vimeo.com/503093120> and then have a go at these questions. If you don't have counters or cubes, you could use, lego bricks, pasta or raisins etc...

**1** Use counters or cubes to make each number.



a) one more than 21

b) one more than 34

c) one less than 41

d) one less than 30

**2** Use different colours to show each number on the grid.



a) one less than 17      c) one more than 39

b) one more than 26      d) one less than 50

|    |    |    |    |    |    |    |    |    |    |
|----|----|----|----|----|----|----|----|----|----|
| 1  | 2  | 3  | 4  | 5  | 6  | 7  | 8  | 9  | 10 |
| 11 | 12 | 13 | 14 | 15 | 16 | 17 | 18 | 19 | 20 |
| 21 | 22 | 23 | 24 | 25 | 26 | 27 | 28 | 29 | 30 |
| 31 | 32 | 33 | 34 | 35 | 36 | 37 | 38 | 39 | 40 |
| 41 | 42 | 43 | 44 | 45 | 46 | 47 | 48 | 49 | 50 |

Ready for your challenge? Click here for a true or false question: <https://resources.whiterosemaths.com/wp-content/uploads/2020/01/T-or-F-Year-1-S4-One-more-one-less.pdf>

WALT: identify one more and one less than a given number.

Tuesday 9<sup>th</sup> February 2021.

Watch the video <https://vimeo.com/503098045> and then have a go at these questions:

3 Fill in the missing numbers.

| One less | Number | One more |
|----------|--------|----------|
|          | 31     |          |
| 31       |        |          |
|          |        | 31       |
| 47       |        |          |
|          |        | 47       |

4



My number has 4 tens. One more than my number would make the tens digit change.

Whitney




My number is one more than forty-five.


Dexter


Who has the greater number?

Watch the video <https://vimeo.com/503099894> and then have a go at answering these questions:

Compare objects within 50





**1** a) Draw counters to show the apples. 



|  |  |  |  |  |
|--|--|--|--|--|
|  |  |  |  |  |
|  |  |  |  |  |

|  |  |  |  |  |
|--|--|--|--|--|
|  |  |  |  |  |
|  |  |  |  |  |

b) Draw counters to show the children. 



|  |  |  |  |  |
|--|--|--|--|--|
|  |  |  |  |  |
|  |  |  |  |  |



|  |  |  |  |  |
|--|--|--|--|--|
|  |  |  |  |  |
|  |  |  |  |  |


c) Complete the sentences.

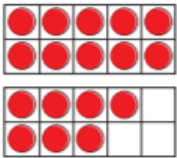
There are  apples.

There are  children.

There are fewer \_\_\_\_\_ than \_\_\_\_\_

d)  All the children can have one apple. Is Teddy correct? 

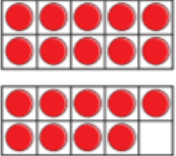
**2** Draw counters to make the statements true. 

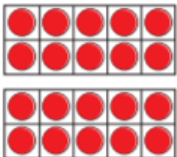
a)   $>$ 

|  |  |  |  |  |
|--|--|--|--|--|
|  |  |  |  |  |
|  |  |  |  |  |


b) 

|  |  |  |  |  |
|--|--|--|--|--|
|  |  |  |  |  |
|  |  |  |  |  |


 $>$  

c)   $<$ 


|  |  |  |  |  |
|--|--|--|--|--|
|  |  |  |  |  |
|  |  |  |  |  |

d)   $=$ 

|  |  |  |  |  |
|--|--|--|--|--|
|  |  |  |  |  |
|  |  |  |  |  |

Is there more than one answer for each? 

Watch the video <https://vimeo.com/503102857> and then have a go at answering these questions:

Compare numbers within 50


**1** Tick the number sentences that are true.  
Use cubes or counters to help you.

a) 12 is more than 13

b) 33 is less than 41


c) 2 tens and 8 ones is equal to twenty-eight


d)  $40 + 8$  is more than  $30 + 9$


e) Thirty-one is less than 3 tens


**3** Write  $<$ ,  $>$  or  $=$  in each circle.


24











3 tens and 14 ones

**2** Write the missing phrase.

greater than
less than
equal to

a) 22 is \_\_\_\_\_ 29

b) 41 is \_\_\_\_\_ 4 tens

c) Forty-six is \_\_\_\_\_  $40 + 3$

d)  $40 + 8$  is \_\_\_\_\_ one more than 47

**4** Complete the table.  
Write or draw your answers.

|  |              |  |
|--|--------------|--|
|  | is more than |  |
|  | =            |  |
|  | >            |  |
|  | is less than |  |
|  | is equal to  |  |

Go to <https://vimeo.com/503093819> and then have a go at answering these questions:

Order numbers within 50

**1 a) What are the numbers?**

Write the numbers in order.  
Start with the smallest number.

**b) What are the numbers?**

Write the numbers in order.  
Start with the smallest number.

**2 Write the numbers in order.**  
Start with the smallest number.

a) 36 31 32

b) 39 49 29

**3 Write the numbers in order.**  
Start with the greatest number.

17

41

28

**4 Complete the number sentence.**

2 tens and 3 ones <  < forty-one

Is there more than one answer?

Ready for your challenge? Click here <https://resources.whiterosemaths.com/wp-content/uploads/2020/01/T-or-F-Year-1-S7-Order-numbers-within-50.pdf>